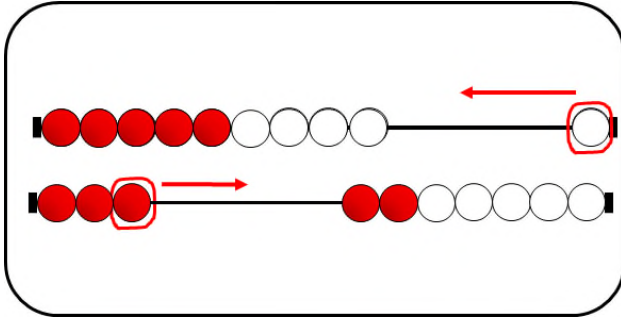


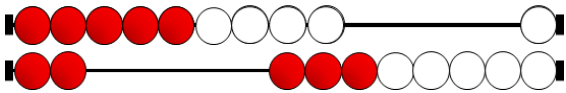

배움 12. 레컨릭으로 나타낸 수 파악하기 레벨4

월 일

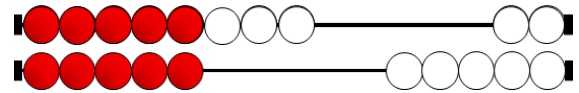
1. 도전 30초! - ()안에 알맞은 수를 최대한 빨리 써보세요.



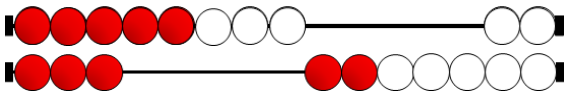
지난 시간에 배웠던
10만들기를 떠올려봐!



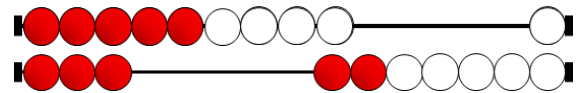
()



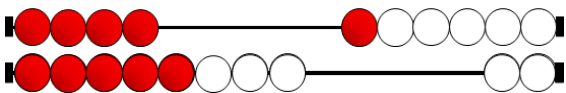
()



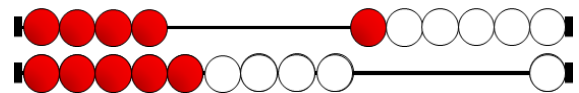
()



()



()

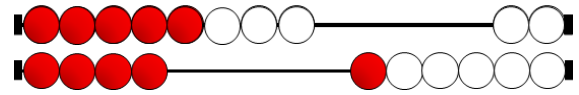


()

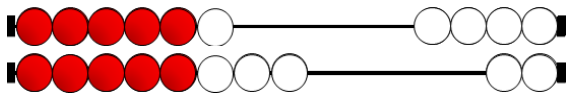
2 도전 30초! - ()안에 알맞은 수를 최대한 빨리 써보세요.



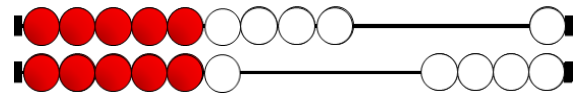
()



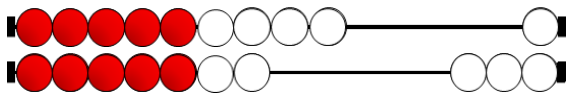
()



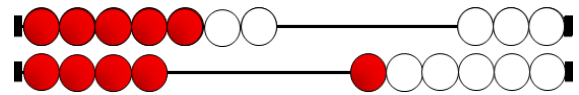
()



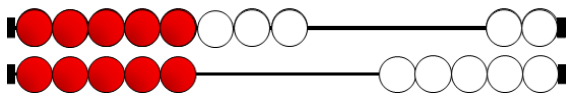
()



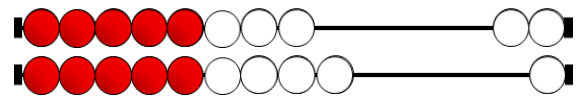
()



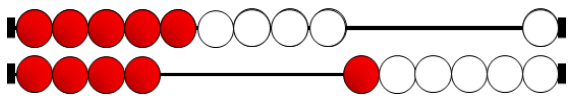
()



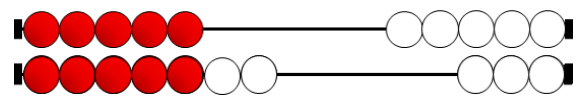
()



()



()



()